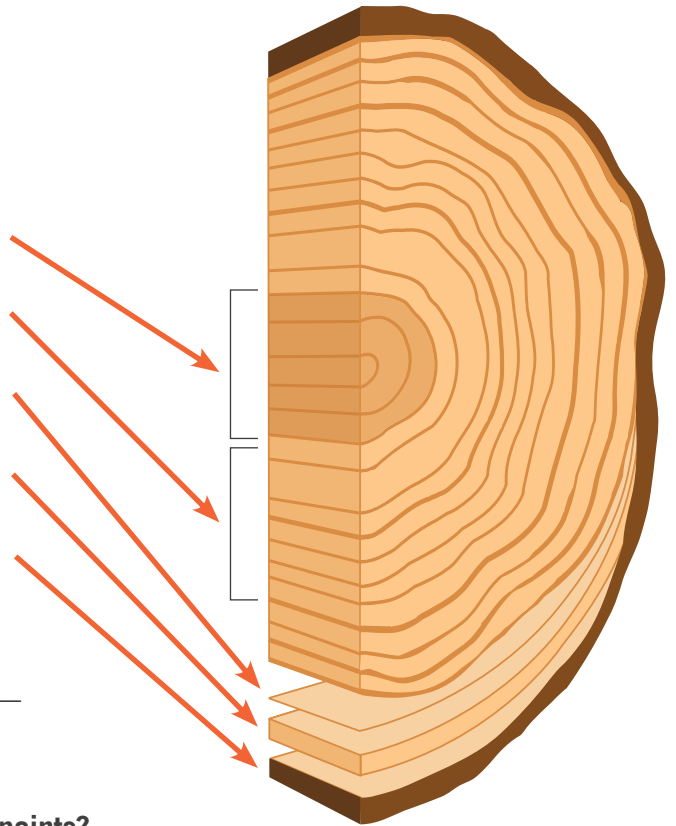


NAME _____ DATE _____

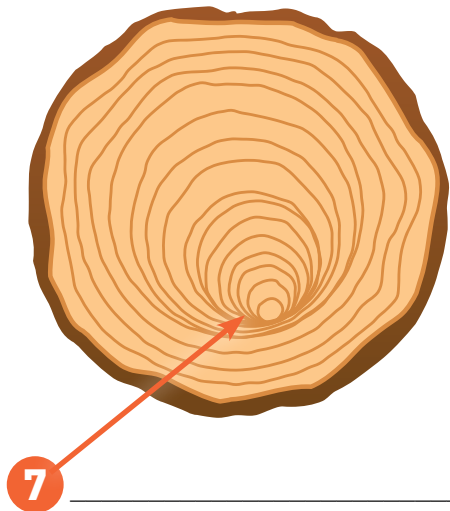
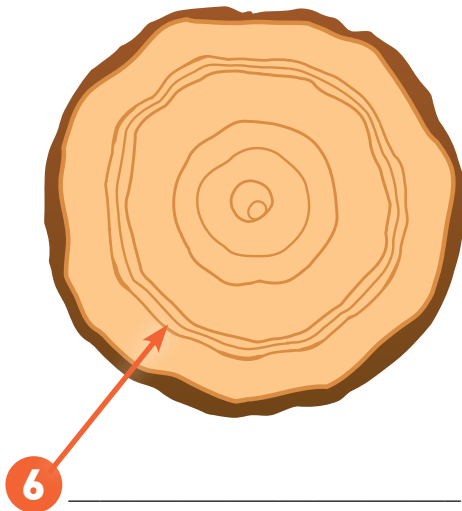
Use the image at the right to label the tree cookie parts:

- 1 _____
- 2 _____
- 3 _____
- 4 _____
- 5 _____



How old was this tree when it was cut? _____

Cookie clues: What happened to the tree where the arrow points?



CAREER CORNER

CLIMATE SCIENTISTS study long-term weather patterns. One way they learn about weather that happened in the past is to look at tree growth rings. In warm, wet years, trees grow faster—and have wider growth rings—than in cool, dry years.

I LOVE MY
GREEN JOB!